

Mathematics & English Homework Sheet

Name: _____

Hand in on: _____

A: Number facts

Try not to use a calculator. Have someone time how long it takes you & record this time in the box below.

Adding & Subtracting

1. $58 + 35 =$
2. $31 + 59 =$
3. $72 + 13 =$
4. $57 + 18 =$
5. $92 - 75 =$
6. $46 - 26 =$
7. $63 - 24 =$
8. $39 - 18 =$

Multiplying & Dividing

9. $0 \times 2 =$
10. $3 \times 2 =$
11. $5 \times 6 =$
12. $2 \times 8 =$
13. $6 \times 3 =$
14. $6 \times 9 =$
15. $4 \div 2 =$
16. $15 \div 3 =$
17. $18 \div 6 =$
18. $12 \div 2 =$
19. $9 \div 3 =$
20. $42 \div 6 =$

Time taken:

B: Writing sentences

Write one sentence about each picture.



C: Maths signs and sentences

Write one of these maths signs, $<$, $>$, or $=$, in the gaps.

- | | | |
|----------------|------------------|------------------|
| 1. 56 59 | 4. 2.3 2.3 | 7. 4.7 4.9 |
| 2. 26 26 | 5. 8.1 9.2 | 8. 5.8 5.8 |
| 3. 84 83 | 6. 9.5 7.1 | 9. 1.4 1.3 |

When writing **mathematics sentences**, symbols can be used in place of numbers. *Example:* $5 + \spadesuit = 11$, where $\spadesuit = 6$

Work out what number should go where the symbol is.

- | | | | |
|----------------------------|----------------------|--------------------------------|----------------------|
| 10. $5 + \spadesuit = 13$ | $\spadesuit =$ | 15. $8 \times \spadesuit = 40$ | $\spadesuit =$ |
| 11. $9 + \spadesuit = 15$ | $\spadesuit =$ | 16. $\spadesuit \times 6 = 48$ | $\spadesuit =$ |
| 12. $\spadesuit + 8 = 23$ | $\spadesuit =$ | 17. $24 \div \spadesuit = 4$ | $\spadesuit =$ |
| 13. $25 - \spadesuit = 15$ | $\spadesuit =$ | 18. $9 \times \spadesuit = 36$ | $\spadesuit =$ |
| 14. $36 - \spadesuit = 23$ | $\spadesuit =$ | 19. $\spadesuit \div 6 = 5$ | $\spadesuit =$ |

D: Alphabetical order

In your homework book, list these words in alphabetical order;

bait, baby, back, bar, bang, ballet, bacon, bath

Write sentences using 3 of these words to show you understand their meanings.

E: One word answers

Write one word that describes or means ...


1. another name for a policeman.
2. a place where birds are kept.
3. a place where aeroplanes are kept.
4. an instrument for telling the direction.
5. a pocket case for holding money.
6. the middle part of an apple.



Do you have any **spelling words** to learn this week?
Yes / No (circle one)

F: Number pyramid

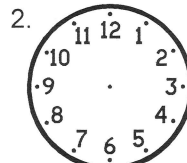
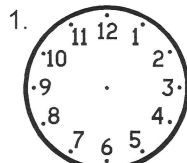
Complete this number pyramid to find the number at the top.



Have you read a **book** or part of a book this week, **just for FUN?**
Yes / No (circle one)



G: Time



On this clock draw the time, 25 minutes past 7.

On this clock draw the time, 10 minutes to 4.

Have you spent some time this week learning or revising your

basic number facts?

Yes / No (circle one)



Comments:



Please sign:
Parent / Caregiver

Well done

