

Mathematics & English Homework Sheet



Name: _____

Hand in on: _____

A: Number facts

Try not to use a calculator. Have someone time how long it takes you & record this time in the box below.

Adding & Subtracting

- 86 + 17 =
- 31 + 61 =
- 46 + 18 =
- 35 + 25 =
- 30 - 26 =
- 82 - 33 =
- 79 - 39 =
- 83 - 37 =

Multiplying & Dividing

- 5 × 2 =
- 3 × 9 =
- 4 × 6 =
- 2 × 3 =
- 7 × 3 =
- 6 × 10 =
- 18 ÷ 2 =
- 12 ÷ 3 =
- 6 ÷ 6 =
- 14 ÷ 2 =
- 30 ÷ 3 =
- 48 ÷ 6 =

Time taken:

B: Words that sound the same

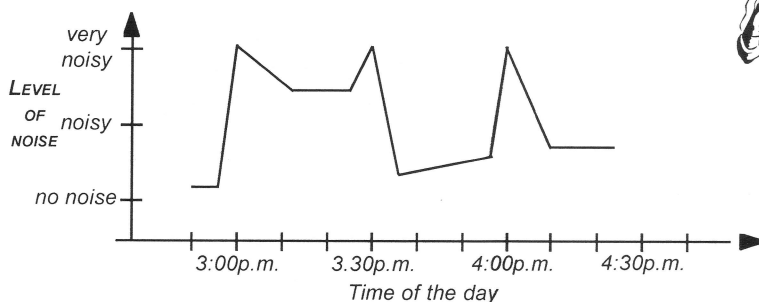
Write 'right' or 'write' in the spaces in these sentences.

- "Did you this?", asked the teacher.
- Who got all the questions
- out your telephone number, please.
- Jason has learnt to his name.
- "What is the time?", asked Mum.
- Write 2 sentences of your own using 'right' and 'write', in your homework book.



C: Understanding graphs


Below is a graph of the noise level of a crowd at a rugby match.



- Write a story about what you think is happening during this rugby game to cause the crowd noise level to go up and down.
- If two tries were scored during the game, at what time do you think they were scored? &

D: Alphabetical order

In your homework book, list these words in alphabetical order;

candle, cap,  calves, cake, captain, cause, careful, cave

Write sentences using 3 of these words to show you understand their meanings.

Have you spent some time this week learning or revising your

basic number facts?

Yes / No (circle one)



E: One word answers

Write one word that describes or means ...

- the name of meat from a pig.
- the yellow part of an egg.
- an instrument for drawing circles.
- an instrument for seeing small objects.
- the air that surrounds the earth.
- another name for a donkey.



Do you have any spelling words to learn this week? Yes / No (circle one)

G: Rounding

Round these numbers to the nearest 10.

Example: 17 rounds to 20, 13 rounds to 10.

- 31 = 3. 87 =
- 76 = 4. 55 =

Round these numbers to the nearest 100.


- 187 = 6. 625 =

Round to the nearest \$, these money amounts.

- \$9.60 = 9. \$7.52 =
- \$4.35 = 10. \$3.48 =

F: Decimal pyramid

Complete this decimal pyramid to find the number at the top.



Have you read a book or part of a book this week, just for FUN?

Yes / No (circle one)



Comments:

Please sign: Parent / Caregiver

