

Homework / Revision Activity Sheet

Set A
3


Name: _____

Room: _____

Complete by: _____

A: 10 Quick Questions

[Try not to use a calculator]
Have someone time how long it takes you & record this time in the box below.

- $80 \times 7 =$
- $567 - 376 =$
- How many seconds in 4 minutes?
- Convert 6.5m to cm
- What is the name of this shape? 
- How much would it cost to buy 9 books, if each book costs \$1.75?
- If the temperature was 6°C then drops 9°C , what is the new temperature?
- $6 + 9 \times 7 =$
- Find $\frac{1}{3}$ of \$9.60
- How much would each person get if you shared \$20.50 between 5 people?

Time taken:

B: Writing a Letter

You are writing a letter to a new penpal for the first time. Tell him / her about:

- > yourself and your family
- > your interests and hobbies
- > pets you have or would like
- > your favourite foods






I will write (tick box):

paragraph or $\frac{1}{2}$ page or 1+ pages



C: Fractions

A fraction of each group of diagrams is shaded. Match the fractions in the box with the shaded diagrams.

- 
- 
- 
- 
- 

$\frac{1}{10}$
 $\frac{1}{5}$
 $\frac{1}{4}$
 $\frac{1}{2}$
 $\frac{3}{4}$

Match the equivalent fractions in the box with the fractions listed.

- $\frac{1}{10} = \dots = \dots$
- $\frac{1}{5} = \dots = \dots$
- $\frac{1}{4} = \dots = \dots$
- $\frac{1}{2} = \dots = \dots$
- $\frac{3}{4} = \dots = \dots$

$\frac{2}{10}$ $\frac{2}{8}$ $\frac{5}{10}$ $\frac{25}{100}$
 $\frac{20}{100}$ $\frac{10}{100}$ $\frac{50}{100}$
 $\frac{2}{20}$ $\frac{75}{100}$ $\frac{30}{40}$

D: Dictionary Skills

In your homework book, list these words in **alphabetical order**. Write a brief **dictionary meaning** for each word:

inch, yard, foot, mile, furlong, marathon

* What do these words have in common?

* **Write** sentences using **3** of these words to show you understand their meanings.




Have you spent some time this week learning or revising your

basic number facts?

Yes / No (circle one)



E: Word Problems

- If $\frac{1}{4}$ of the class like cats, what fraction of the class do not like cats? 
-  If $\frac{2}{3}$ of the class are outside playing, what fraction of the class are still inside?
- Fourteen children or $\frac{1}{2}$ of the class were away from school sick. How many children are there normally in this class, when all children are at school? 

Do you have any **spelling words** to learn this week?


Yes / No (circle one)



F: Media Studies

Find an item of **local news** in the newspaper or from TV.

Example:
New shops to open soon.



- * What is the headline?
- * What is the item of news about?

Have you **read a book** or part of a book this week, **just for FUN?**

Yes / No (circle one)



Comments:



Please sign:
Parent / Caregiver

Well done!

